

CALENDAR MATH

Write today's date. Example: *Tuesday, March 25, 2020*

Today is _____

CALENDAR

Write line segment or line.



1



2

DAILY DEPOSITOR

Write each number in standard form.

3 Seventy thousand, eight hundred twenty-three _____

4 Ninety-seven thousand, four hundred _____

COUNTING TAPE

Use the counting tape to help you answer the questions below.

38 39 40 41 42 43 44 45 46 47 48 49 50 51 52



5 What are 2 factors of 48? _____

6 What are 2 factors of 40? _____

COIN COUNTER

- 7 You have \$1.00. Estimate **about how many** packs of gum you can buy if each pack of gum is 16¢ .

Answer: _____ packs of gum

- 8 You have \$1.00. Estimate **about how many** erasers you can buy if each eraser is 27¢ .

Answer: _____ erasers

A FRACTION A DAY

Add the fractions. Write your answer in simplest form.

9

$$\frac{3}{8} + \frac{1}{8} =$$

10

$$\frac{5}{12} + \frac{4}{12} =$$

LEARN

Watch the "Learn #1" video.

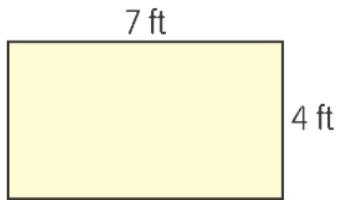
<https://sway.office.com/uztHNoACAvmWF5C4?ref=Link>

TRY Practice finding the perimeter of a rectangle

$$\begin{aligned} \text{Perimeter of a rectangle} \\ &= (2 \times \text{Length}) + (2 \times \text{Width}) \\ &= 2 \times (\text{Length} + \text{Width}) \end{aligned}$$

Use the formula to find the perimeter of the rectangles.

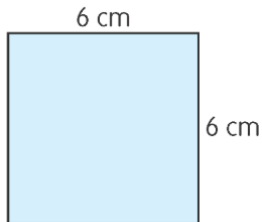
1



Math Problem: _____

Perimeter = _____ feet

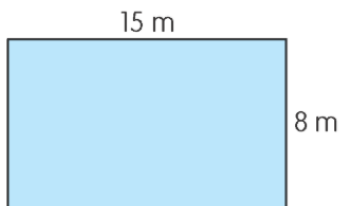
2



Math Problem: _____

Perimeter = _____ centimeters

3



Math Problem: _____

Perimeter = _____ meters

Answer the question below. Show all your work.

4

Suzanne has a rectangular pool that has a length of 15 feet and a width of 7 feet. What is the perimeter of the pool?

Answer: _____

Optional: Watch the first "Try" video to see these problems solved.

<https://sway.office.com/uztHNoACAvmWF5C4?ref=Link>

LEARN

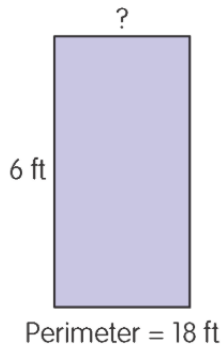
Watch the "Learn #2" video.

<https://sway.office.com/uztHNoACAvmWF5C4?ref=Link>

TRY Practice finding an unknown side when given perimeter

Use what you know about perimeter to find the unknown side of each rectangle.

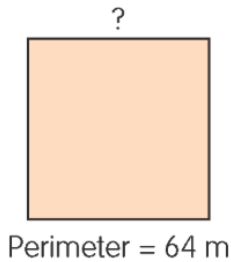
1



Length of unknown side: _____

Work:

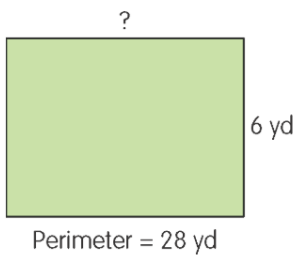
2



Length of unknown side: _____

Work:

3



Length of unknown side: _____

Work:

Optional: Watch the second "Try" video to see these problems solved.

<https://sway.office.com/uztHNoACAvmWF5C4?ref=Link>

Use what you know about perimeter to answer the question below. Show all your work.

- 4 The perimeter of a rectangular rug is 32 feet. The length of the rug is 11 feet. Find the width of the rug.

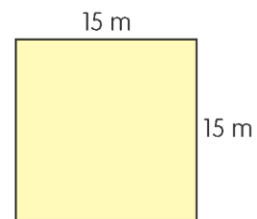
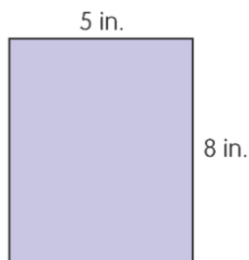
Answer: _____

INDEPENDENT PRACTICE

Complete the following problems. You will turn these into me, and I will check your understanding. Do your best! 😊

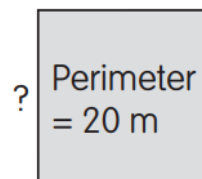
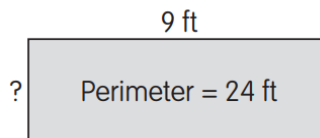
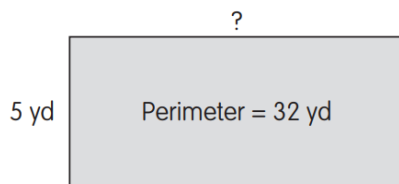
Use the formula to find the perimeter of the rectangles.

Perimeter of a rectangle
= $(2 \times \text{Length}) + (2 \times \text{Width})$
= $2 \times (\text{Length} + \text{Width})$



1 Perimeter =	2 Perimeter =	3 Perimeter =
---------------	---------------	---------------

Use the perimeter formula to find the unknown side.



4	5	6
---	---	---

Use what you know about perimeter to answer the questions below
Show all your work.

- 7 The length of a rectangular field is 32 yards and its width is 9 yards. Pat ran around the field once. Find the distance Pat ran.

Answer: _____

- 8 The **perimeter** of a square gym is 36 yards. Find the length of one side of the gym.

Answer: _____

LET'S EXPLORE

Do you want more practice? Try an optional activity below.

1. Create rectangles with Legos and calculate the perimeter.
2. Play an online game: Perimeter Climber

<https://toytheater.com/perimeter-climber/#>

MATH JOURNAL

If there is anything that is unclear, write a note to me below so we can discuss it together during my office hours today or tomorrow.

Remember to practice your math facts! 😊